



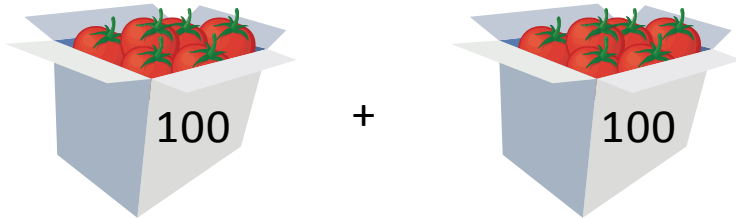
NAME _____

DATE _____

COUNTING IN BUNDLES

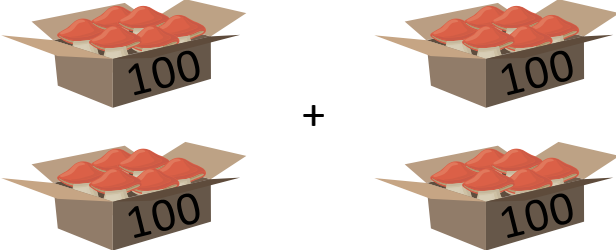
Fill in the blanks with numbers as shown in the bundles.

Example:




$$100 + 100 = 100 + 100 = \underline{200}.$$

1)



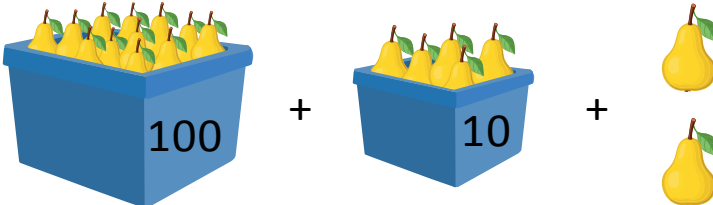
$$= 100 + 100 + 100 + 100 = \underline{\quad}$$

2)



$$= 100 + 100 + 100 + 100 + 100 + 100 + 100 + 100 + 100 + 100 = \underline{\quad}.$$

3)



$$= 100 + 10 + 2 = \underline{\quad}$$

4)



$$= 100 + 100 + 2 = \underline{\quad}$$